

RELACIONE



www.smartkids.com.br

Relacione o detalhe ampliado que pertence a cada animal:

a.



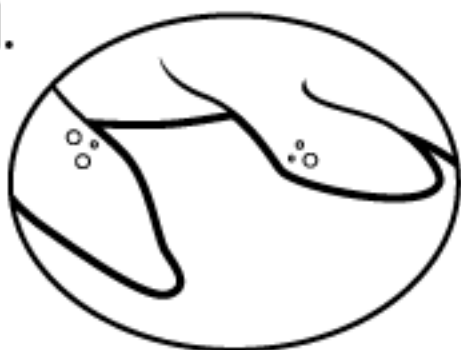
b.



c.




d.




1.



2.



3.



4.



Resposta: a-3, b-1, c-4, d-2.